



mein Name _____

Montag

Dienstag


Mittwoch

Donnerstag

Freitag

24

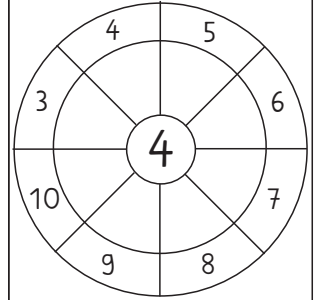

8	
4	
6	
3	



Male die Sterne aus, die das Ergebnis in der Mitte ergeben!




Wenn du meine Zahl mit sechs multiplizierst, erhältst du 42.

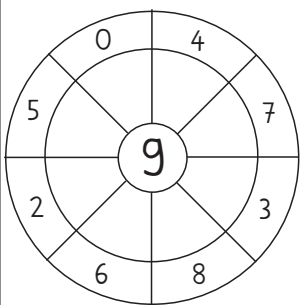

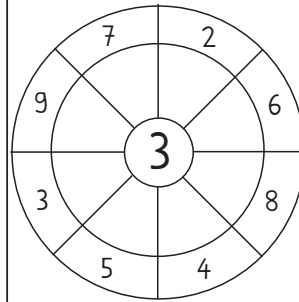
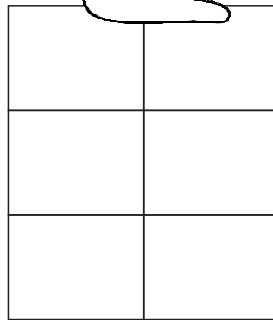



Verbinde!




- | | |
|-------|----|
| 3 · 4 | 54 |
| 5 · 7 | 12 |
| 8 · 9 | 56 |
| 9 · 6 | 35 |
| 7 · 8 | 72 |



Finde Aufgaben! Male in derselben Farbe an!



Wenn ich meine Zahl durch sechs teile, erhalte ich wieder sechs.



Finde Aufgaben! Male in derselben Farbe an!

Meine Zahl ist eine Quadratzahl. Sie ist größer als 30 und kleiner als 40.

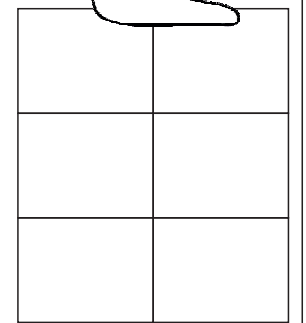

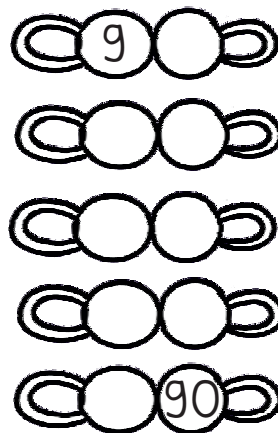



Ein Fahrrad hat zwei Räder. An der Schule stehen neun Fahrräder.



Verbinde!






- | | |
|-------|----|
| 5 · 6 | 40 |
| 4 · 8 | 63 |
| 7 · 9 | 18 |
| 9 · 2 | 32 |
| 5 · 8 | 30 |







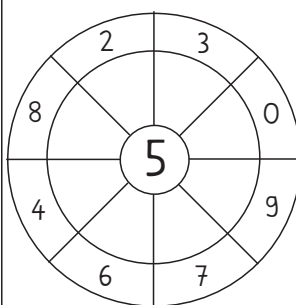

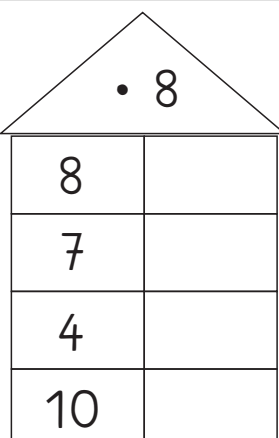



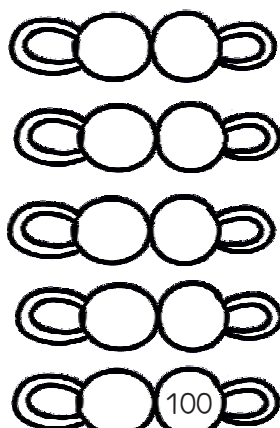


mein Name _____

Montag	Dienstag	Mittwoch	Donnerstag	Freitag
--------	----------	----------	------------	---------

 <table border="1" style="width: 100%; height: 100%; border-collapse: collapse;"> <tr><td style="width: 50%; height: 50%;"></td><td style="width: 50%; height: 50%;"></td></tr> <tr><td style="width: 50%; height: 50%;"></td><td style="width: 50%; height: 50%;"></td></tr> <tr><td style="width: 50%; height: 50%;"></td><td style="width: 50%; height: 50%;"></td></tr> </table>							<p>Ich suche das Neunfache von sieben.</p> 	 _____	 Finde Aufgaben! Male in derselben Farbe an!	<p>Meine Lieblings - einmaleinsaufgabe:</p> 

<p>Welche Bälle gehen ins Tor?</p> 	 Finde Aufgaben! Male in derselben Farbe an!	<p>Schreibe die Zahlen der 4er Reihe auf!</p> <table border="1" style="width: 100%; height: 100%; border-collapse: collapse;"> <tr><td style="width: 50%; height: 20px;"></td><td style="width: 50%; height: 20px;"></td></tr> <tr><td style="width: 50%; height: 20px;"></td><td style="width: 50%; height: 20px;"></td></tr> <tr><td style="width: 50%; height: 20px;"></td><td style="width: 50%; height: 20px;"></td></tr> <tr><td style="width: 50%; height: 20px;"></td><td style="width: 50%; height: 20px;"></td></tr> </table>									 _____	<p>Welche Bälle gehen ins Tor?</p> 

	<p>Finde die Teiler von:</p> 	$8 \cdot 8 = \underline{\quad}$ $9 \cdot 9 = \underline{\quad}$ $7 \cdot 7 = \underline{\quad}$ $6 \cdot 6 = \underline{\quad}$ $5 \cdot 5 = \underline{\quad}$ $4 \cdot 4 = \underline{\quad}$		 _____
--	--	--	--	--

	$24 = 4 \cdot \underline{\quad}$ $32 = 8 \cdot \underline{\quad}$ $81 = 9 \cdot \underline{\quad}$ $45 = 5 \cdot \underline{\quad}$ $12 = 3 \cdot \underline{\quad}$ $18 = 2 \cdot \underline{\quad}$ $56 = 7 \cdot \underline{\quad}$	<p>In einer Kiste sind acht Flaschen Limonade.</p>  Herr Meyer kauft drei Kisten. _____ _____	<p>Ich suche das Achtfache des Doppelten von zwei.</p> 	<p>Schreibe die Zahlen der 9er Reihe auf!</p> <table border="1" style="width: 100%; height: 100%; border-collapse: collapse;"> <tr><td style="width: 50%; height: 20px;"></td><td style="width: 50%; height: 20px;"></td></tr> <tr><td style="width: 50%; height: 20px;"></td><td style="width: 50%; height: 20px;"></td></tr> <tr><td style="width: 50%; height: 20px;"></td><td style="width: 50%; height: 20px;"></td></tr> <tr><td style="width: 50%; height: 20px;"></td><td style="width: 50%; height: 20px;"></td></tr> <tr><td style="width: 50%; height: 20px;"></td><td style="width: 50%; height: 20px;"></td></tr> </table>										